

5 Day Temperature Record Report

Name: _____ Location: _____

For each day below, write the temperatures you recorded for the week.

Monday

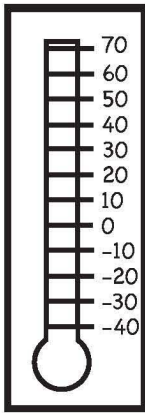
Tuesday

Wednesday

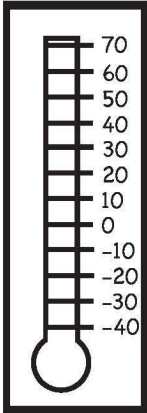
Thursday

Friday

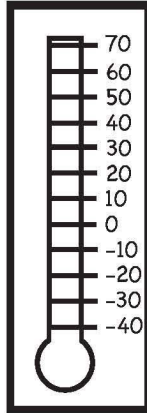
_____ ° F



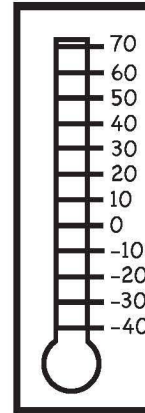
_____ ° F



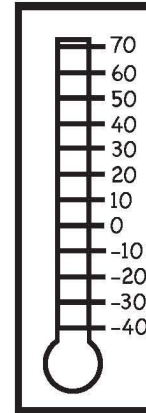
_____ ° F



_____ ° F



_____ ° F



Circle the day that was the warmest.

In the bar graph below, graph the temperatures recorded above.

